













1 Completa con el número en cifras y en letras.

|   |   |  |   |
|---|---|--|---|
| 10  |   |  | 40  |
|  |  |  |  |
| _____   | _____   | _____  | cuarenta  |

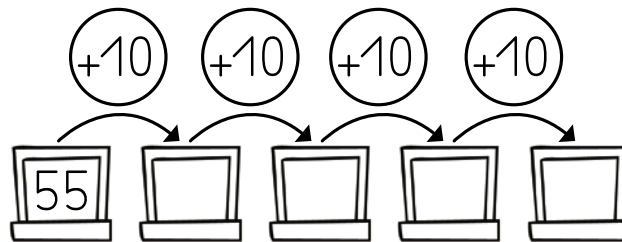
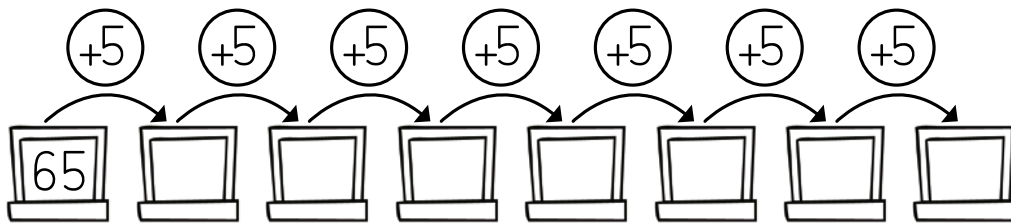
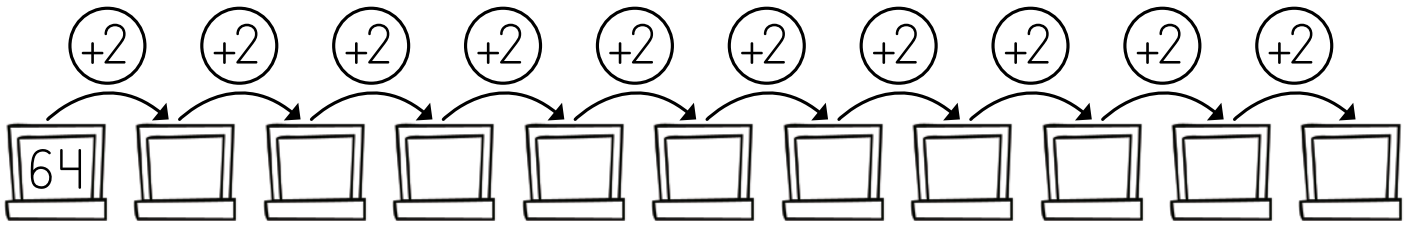
|   |   |  |   |
|---|---|--|---|
|   | 60  |  | 80  |
|  |  |  |  |
| _____   | _____   | _____  | ochenta   |



|  |   |
|--|---|
| 90   | 100   |
|  |  |
| _____  | _____   |



## 2 Continúa las series.



## 3 Calcula cuánto dinero hay en total en cada fila.

|  |  |  |  |  | HAY  |
|---|---|---|---|---|------|
| 2   | 1   | 1   | 2   | 2   | 30 € |
|   | 3   |   | 1   | 4   | €    |
| 1   | 4   |   |   | 2   | €    |
| 5   | 2   | 5   | 1   |   | €    |
|   |   | 4   | 4   | 4   | €    |